

1.



Resimdeki eksik parça aşağıdakilerden hangisidir?

A.




B.



C.



2.



Resimdeki eksik parça aşağıdakilerden hangisidir?

A.



B.



C.



3.




Resimdeki eksik parça aşağıdakilerden hangisidir?


A.



B.



C.



4.



Resimdeki eksik parça aşağıdakilerden hangisidir?

A.



B.



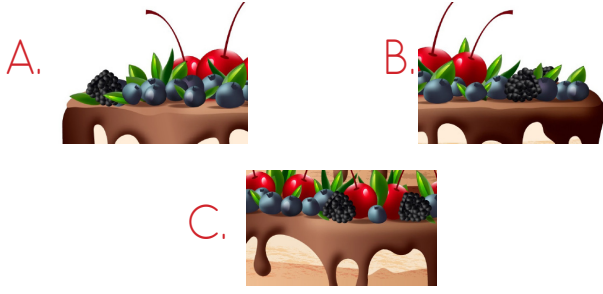
C.




5.



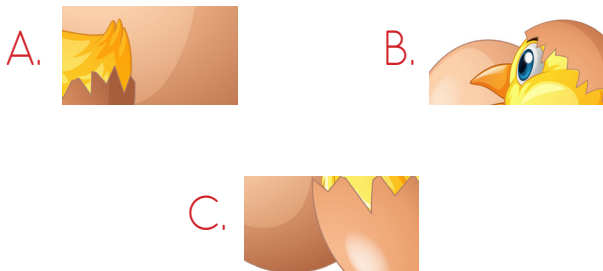
Resimdeki eksik parça aşağıdakilerden hangisidir?



6.



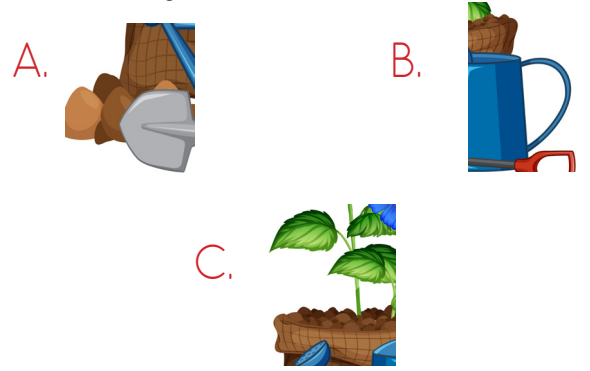
Resimdeki eksik parça aşağıdakilerden hangisidir?



7.



Resimdeki eksik parça aşağıdakilerden hangisidir?



8.



Resimdeki eksik parça aşağıdakilerden hangisidir?

