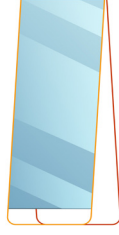


1.



Nesnenin aynadaki yansıması aşağıdakilerden hangisidir?

A.



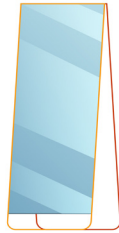
B.



C.



2.



Nesnenin aynadaki yansıması aşağıdakilerden hangisidir?

A.




B.



C.



3.



Nesnenin aynadaki yansıması aşağıdakilerden hangisidir?

A.



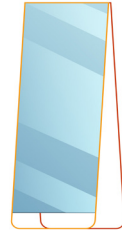
B.



C.



4.



Nesnenin aynadaki yansıması aşağıdakilerden hangisidir?

A.




B.



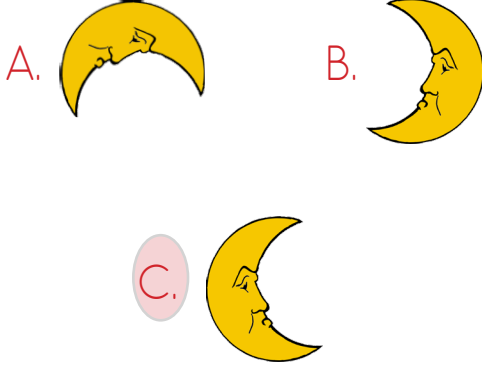
C.



5.




Nesnenin aynadaki yansıması aşağıdakilerden hangisidir?



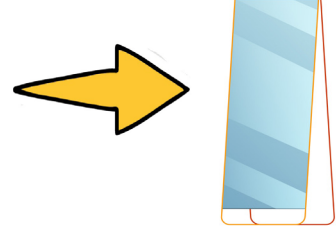
6.



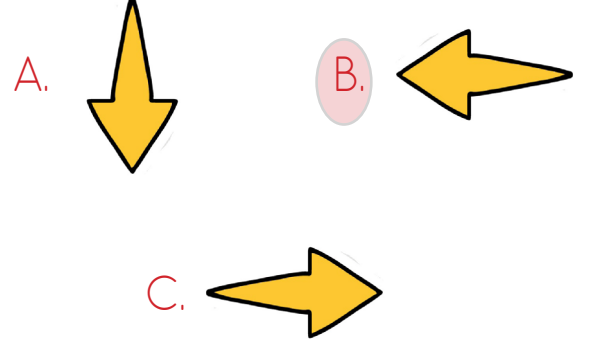
Nesnenin aynadaki yansıması aşağıdakilerden hangisidir?



7.



Nesnenin aynadaki yansıması aşağıdakilerden hangisidir?



8.



Nesnenin aynadaki yansıması aşağıdakilerden hangisidir?

