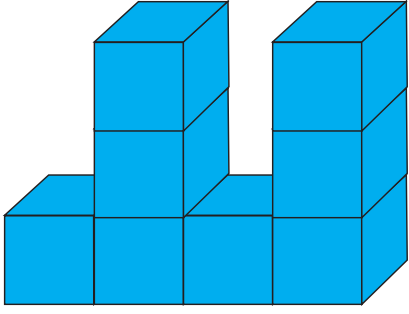




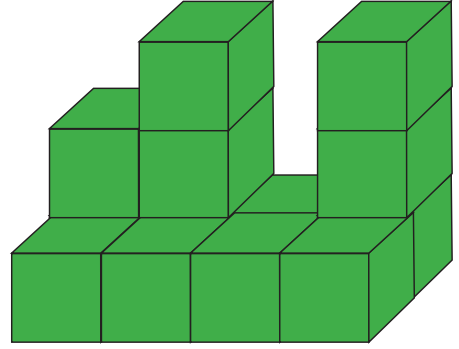
5.



Görselde kaç tane küp vardır?

A. 9      B. 8      C. 7


7.



Görselde kaç tane küp vardır?

A. 8      B. 13      C. 11

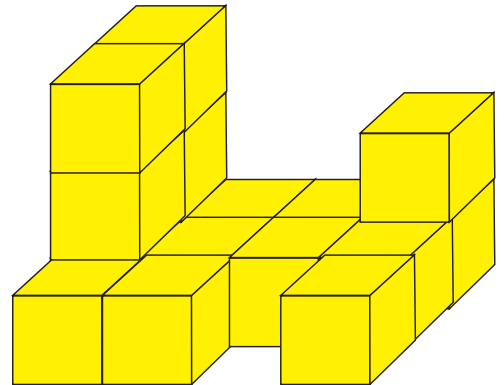
6.



Görselde kaç tane küp vardır?

A. 18      B. 16      C. 20

8.



Görselde kaç tane küp vardır?

A. 16      B. 17      C. 18