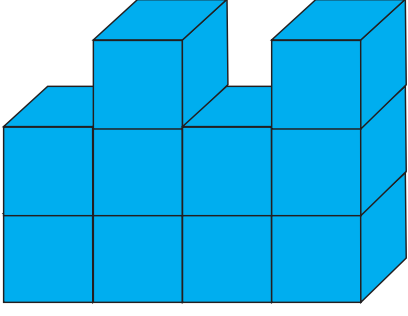


1.



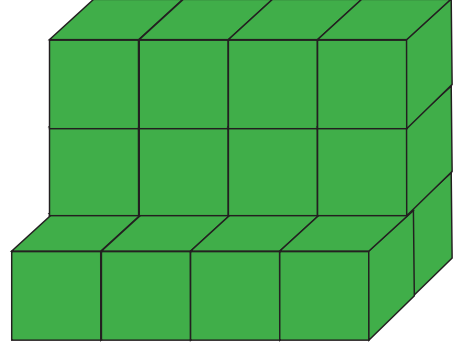
Görselde kaç tane küp vardır?

A. 10

B. 9

C. 8

3.



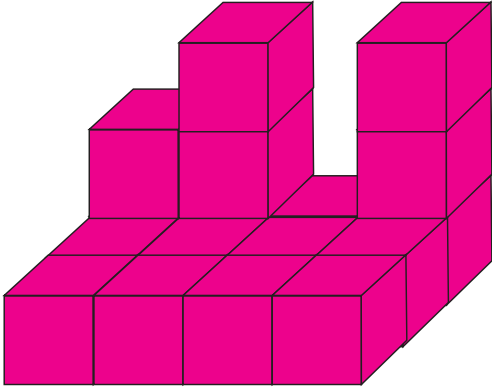
Görselde kaç tane küp vardır?

A. 13

B. 12

C. 16

2.



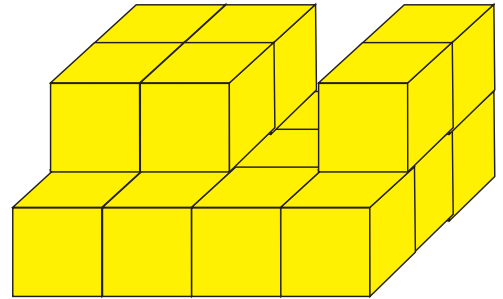
Görselde kaç tane küp vardır?

A. 16

B. 17

C. 18

4.



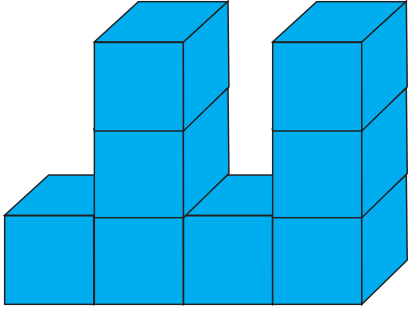
Görselde kaç tane küp vardır?

A. 18

B. 17

C. 16

5.



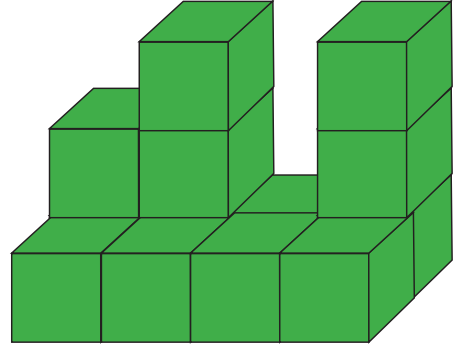
Görselde kaç tane küp vardır?

A. 9

B. 8

C. 7

7.



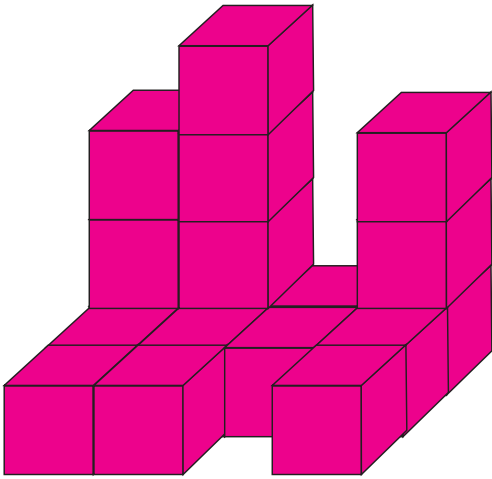
Görselde kaç tane küp vardır?

A. 8

B. 13

C. 11

6.



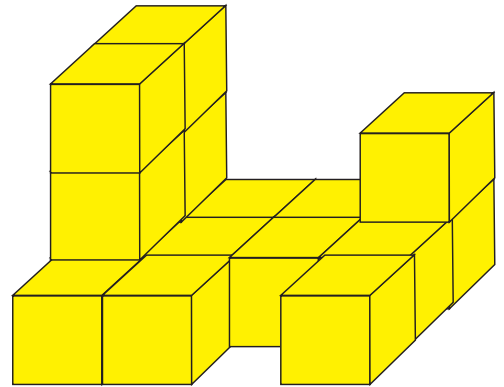
Görselde kaç tane küp vardır?

A. 18

B. 16

C. 20

8.



Görselde kaç tane küp vardır?

A. 16

B. 17

C. 18