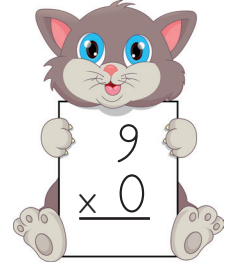
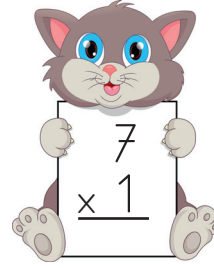
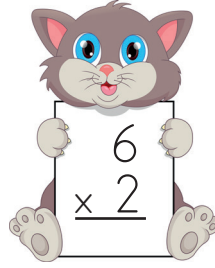
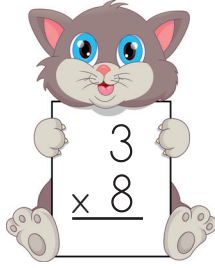
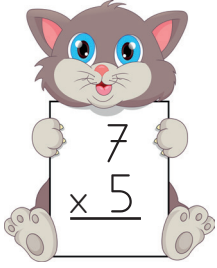
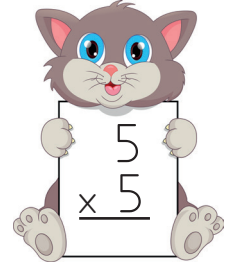
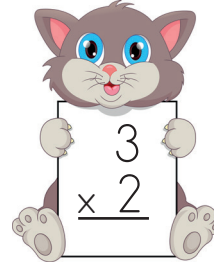
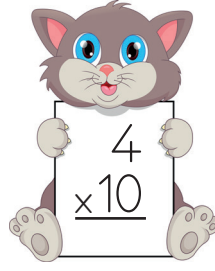
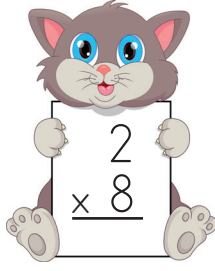
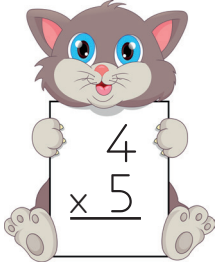














 Aşağıda verilen çarpma işlemlerini yapalım.



 Aşağıda verilen çarpma işlemlerini yapalım sonuçlarını yukarıda verilen boşluklara yazalım.



 Aşağıda verilen çarpma işlemlerini yapalım. Sonuçların yazılı olduğu şekilleri, küçükten büyüğe doğru örnekteki gibi sıralayalım.

$$5 \times 0 = \square$$

$$4 \times 1 = \triangle \quad \square, \triangle, \circ$$

$$3 \times 2 = \circ$$

$$6 \times 2 = \square$$

$$4 \times 4 = \triangle \quad , \quad ,$$

$$5 \times 2 = \circ$$

$$9 \times 1 = \square$$

$$10 \times 1 = \triangle \quad , \quad ,$$

$$3 \times 5 = \circ$$

$$6 \times 3 = \square$$

$$4 \times 5 = \triangle \quad , \triangle,$$

$$7 \times 2 = \circ$$

$$9 \times 2 = \square$$

$$6 \times 4 = \triangle \quad , \triangle,$$

$$3 \times 3 = \circ$$

$$5 \times 4 = \square$$

$$2 \times 7 = \triangle \quad , \quad ,$$

$$9 \times 3 = \circ$$

✎ Aşağıdaki çarpma işlemlerinde verilmeyen çarpanları bulmak için örümceğin hangi yönlere gitmesi gerektiğini verilen boşluklara yazalım.

$$2 \times 6 = \bullet \times 6$$

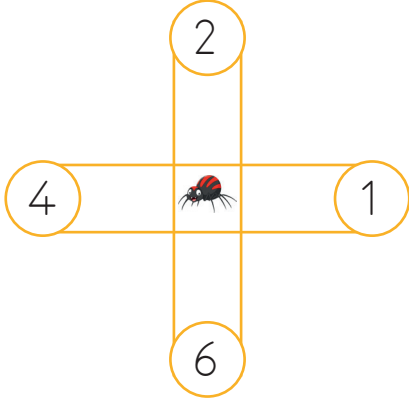
$$1 \times 6 = \blacktriangle \times 6$$

$$3 \times 0 = \bullet \times 2$$

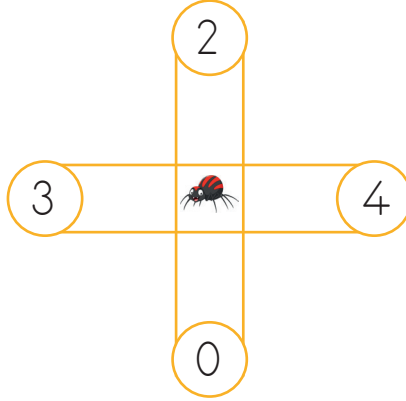
$$2 \times 4 = \blacktriangle \times 2$$

$$1 \times 9 = \bullet \times 1$$

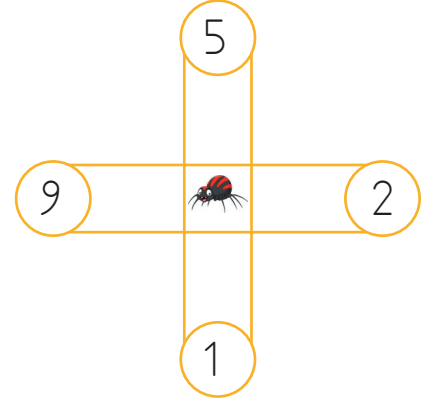
$$5 \times 0 = \blacktriangle \times 2$$



Yukarı, sağa

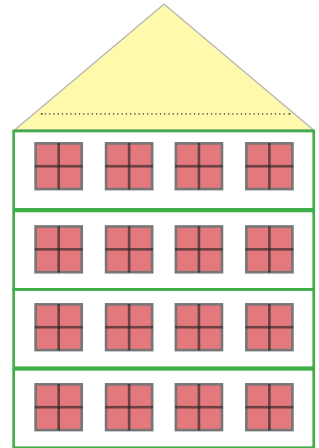
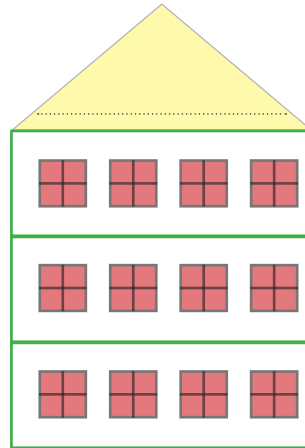
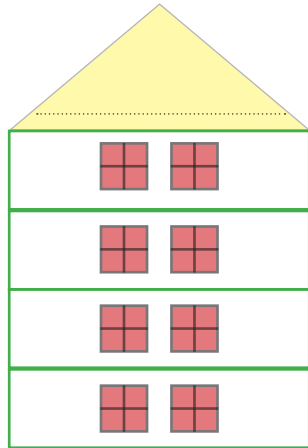
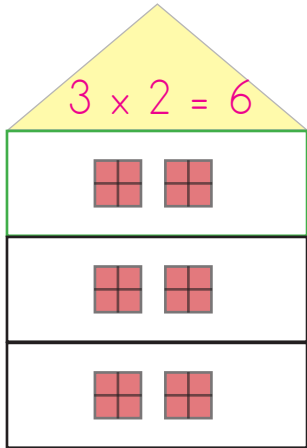


.....



.....

✎ Aşağıdaki apartmanlardaki pencere sayılarını çarpma işlemi ile ifade edelim ve çarpım sonucunu yazalım.



✎ Aşağıdaki çarpa işlemleri ile sonuçlarını eşleştirelim.

$$4 \times 3$$

$$9 \times 1$$

$$5 \times 0$$

$$2 \times 3$$

$$4 \times 4$$



$$8 \times 2$$

$$8 \times 0$$

$$6 \times 3$$

$$7 \times 3$$

$$4 \times 8$$